

Şekil Sayı Eşleştirme

×

= 8

→

= 4

☆

= 1

○

= 3

+

= 0

◇

= 2

⬠

= 9

▽

= 7

△

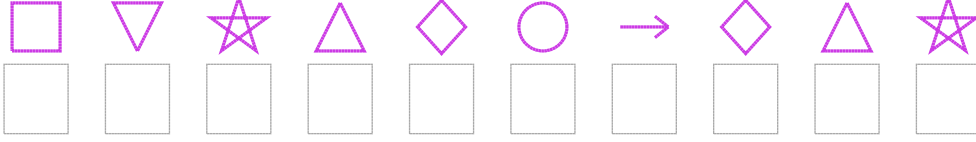
= 5

□

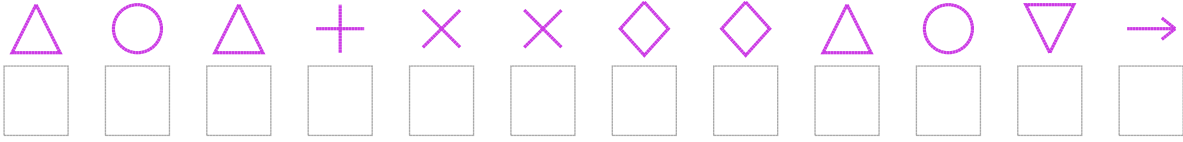
= 6

Aşağıdaki uzun şifreleri hatasız çözerek altlarına yazın:

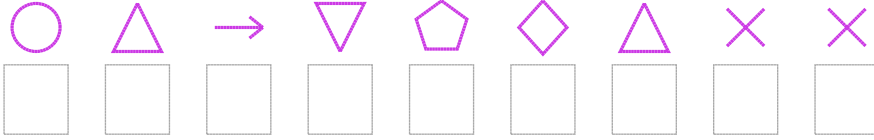
1. Şifre



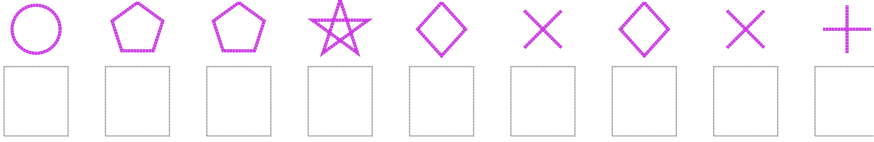
2. Şifre



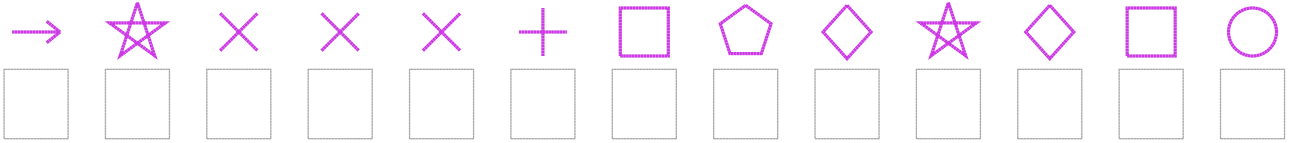
3. Şifre



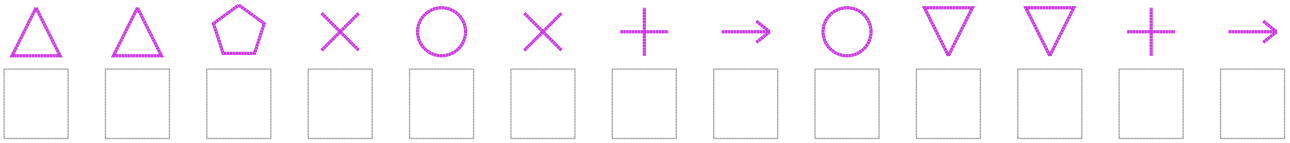
4. Şifre



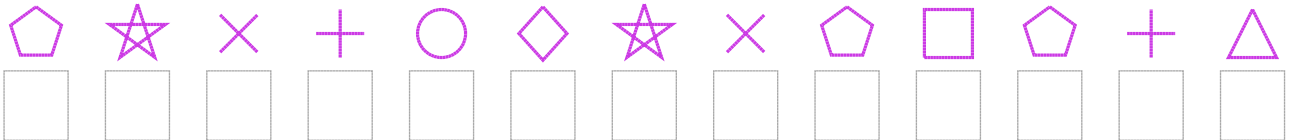
5. Şifre



6. Şifre



7. Şifre



□ BONUS: 3. ve 6. şifrenin üçüncü rakamının toplamı kaçtır?

Cevap Anahtarı

1. Şifre: 6715234251

2. Şifre: 535088225374

3. Şifre: 354792588

4. Şifre: 399128280

5. Şifre: 4188806921263

6. Şifre: 5598380437704

7. Şifre: 9180321896905

□ Bonus Soru Cevabı: 13